

CLASS 6 (25-26)

SCIENCE HOLIDAY HOMEWORK

NOTE: STUDENTS WILL DO THE HOLIDAY HOMEWORK IN THE SCRAPBOOK.

Q1. Make An Innovative Project on the topic **“NATURE’S TREASURES”** .(REFER SCIENCE TEXTBOOK CHAPTER 11)

Your project should cover the following topics mentioning below. Paste or draw the relevant pictures to make it interesting.

- Renewable and Non renewable resources
- Table showing the percentage of different components of air.
- Air pollution: Causes, effects and control
- Impact of water pollution on the Living Beings
- Fossil fuels (Coal, Petroleum, Natural Gas)

NOTE: PROJECT SHOULD NOT EXCEED MORE THAN 6-8 PAGES.

Q2. Make a creative poster in the Scrapbook on the topic **“BIODIVERSITY”** (REFER SCIENCE TEXTBOOK CHAPTER 1)

Q3. SOLVE THE WORKSHEET BASED ON CHAPTER 2 IN THE SCRAPFILE.

A. CHOOSE THE MOST APPROPRIATE ANSWER:

1. The respiratory organ of fish is gills it takes oxygen from:

- a) oxygen present in the air
- b) oxygen dissolved in water
- c) all of these
- d) oxygen from plants

2. Which of the following organism is found in Polar Regions?

- a) Dog
- b) Cat
- c) Snake
- d) Penguin

3. The plants and animals that live on land are said to live in

- a) Terrestrial habitat
- b) Aquatic habitat
- c) Saline habitat
- d) Marine habitat

4. The camel stores excess fat in which part of the body?

- a) Liver
- b) Lung
- c) Stomach
- d) Hump

B. Answer the following questions:

1. Name some plants found on mountains.
2. Name some National Parks and sanctuaries.
3. Define the term 'Biodiversity'.
4. How are penguin adapted for cold climate of the polar regions?
5. What do you mean by a National Park?
6. Manu's mother maintains a kitchen garden. One day, she was digging out radish from the soil. She told Manu that radish is a kind of root. Examine a radish and write what type of root it is. What type of venation would you observe in the leaves of radish plant?
7. As the population grows and people want more comfortable lives, forests are being cut down to meet various needs. How can this affect our surroundings? How do you think we can address this challenge?
8. Raj argues with his friend Sanjay that **Gudhal (hibiscus) plant is a shrub**. What questions can Sanjay ask for clarification?

C. State whether each of the following statement is True or False:

1. Pachmarhi Biosphere Reserve consists of one national park named Satpura and two wildlife sanctuaries named Bori and Panchmarhi.

a) True

b) False
2. A waterless area of land covered with sand and having little or no vegetation is called a desert.

a) True

b) False
3. A large area of land covered mainly with trees and plants is called a mountain.

a) True

b) False

SOCIAL- SCIENCE HOLIDAY HOMEWORK

CLASS VI

GENERAL INSTRUCTIONS

- **Handwritten Work:** Make sure all work is completed by hand.
- **Neatness and Presentation:** Ensure your work is clean, organized, and easy to read.
- **Creativity:** Incorporate visuals like photographs, printouts, or drawings to enhance your work.
- **Submission:** Submit your holiday homework by 10 July, 2025.
- **The project and assignment will be graded as a part of the Internal Assessment.**

1. PROJECT : FORMS OF GOVERNMENT (Refer CH – 23)

Kindly read the chapter and choose **ANY ONE** form of government

- Write their features, advantage and disadvantages.
- Also mention at least two countries who are following such form of government. (Above activity should be done in 2-3 pages)

2. Write the names of States and Union Territories of India along with their capitals on the political map of INDIA.

3 .Draw a neat and labelled diagram of the Heat Zones of the Earth Refer Page no.19 from the text book.

4. Draw a neat and labelled diagram of Circle of Illumination Refer Page no.26 from the text book.

NOTE: All the activities to be done in the same scrap book. Also, there is an assignment on the following page. Kindly take a print of the same and complete it and paste it in scrap book.

ASSIGNMENT -1

NAME: _____ CLASS: _____ ROLL NO: _____

I. CASE BASED QUESTIONS:

1. An icy celestial body that orbit around the sun is known as Comet. Comet usually follow very long orbits and take years to come into view after they have passed by Earth once. The major components which form a comet are generally snow and rocky dust. A comet develops a long tail and start glowing when it gets closer to the sun. The world's most famous comet is, perhaps, the Halley's Comet. The Halley's Comet can be seen with the naked eye in a time gap of every 76 years when it gets near to the sun.

A. Define Comet.

Ans _____
_____.

B. Name the major components which form a comet.

Ans _____
_____.

C. The Halley's Comet can be seen with the naked eye in a time gap of every 78 years. TRUE/FALSE

Ans. _____.

2. The early man started using stones as tools to pluck fruits and hunt animals. Later on, he shaped these tools into various shapes and used them for different purposes. This period in which stone was used as a prominent tool is called the Stone Age. The Stone Age is divided into three ages: Palaeolithic age, Mesolithic age and Neolithic age.

A. The early man used _____ as a tool to pluck fruits and hunt animals.

B. Define Stone age?

Ans _____
_____.

C. The Stone Age is divided into four ages. True \ False.

Ans _____.






**ENGLISH
HOLIDAYS
HOMEWORK
(2025-26)**

Name: _____

Roll No.: _____

Class/Section: _____



GENERAL INSTRUCTIONS:

- All the questions are mandatory in worksheets.
- The answers should be written on the printed A4 size sheets only.
- Complete the homework neatly and legibly in your best handwriting.
- Submit all sheets stapled together in a folder with your name, class, and section clearly written after the vacations.
- Check your spellings, punctuation, and grammar before submission.

WORKSHEET- 1

Rearrange the words to make meaningful sentences:

1. giant/in/a/house/lived/big/a

2. house/had/the/garden/a/beautiful

3. let/enter/he/anyone/never/garden/his

4. would/whenever/children/he/come/some/was/away

5. decided/giant/one day/the/to/his/visit/friend

6. after/came/he/seven/back/years

7. children/playing/he/in/saw/the/garden/his

8. angrily/them/he/away/chased

9. around/high/he/a/the/wall/built/garden

10. trees/flowers/all/lost/their/the/beauty/and

WORKSHEET - 2

Read each sentence and write whether it is a Declarative, Interrogative, Imperative, or Exclamatory sentence.

1. The sun rises in the east.

Sentence Type: _____

2. Can you help me with my homework?

Sentence Type: _____

3. Please close the door.

Sentence Type: _____

4. Wow, what a beautiful sunset!

Sentence Type: _____

5. She enjoys reading books.

Sentence Type: _____

6. Are we going to the zoo tomorrow?

Sentence Type: _____

7. Turn off the lights before you leave.

Sentence Type: _____

8. Hooray! We won the game!

Sentence Type: _____

9. He plays soccer every weekend.

Sentence Type: _____

10. Did you finish your project?

Sentence Type: _____

WORKSHEET - 3

Write a paragraph in about 100-120 words:

How I Celebrated My Birthday

[illegible]

German Summer Holidays Homework (2025-26)

Class VI

1. Make a family Tree under the heading (Mein Stammbaum) on an A4 size sheet. Paste the photos of your family members and write your relation with them in **German**. You can show your creativity in making it in a different/creative way. (maximum sheets to be used - 1)
2. Write the numbers from 0 – 20 on an A4 size ruled sheet (any colour) in **German** (spellings). (maximum sheets to be used - 1)
3. Write 10-15 facts about **Germany** in English on an A4 size ruled sheet. (any colour) (maximum sheets to be used - 2)
4. Paste Pictures of traditional clothes of Germany under the heading (Traditionelle Kleidung von Deutschland) and write their names on an A4 size sheet. (any colour) (maximum sheets to be used - 2)

* Do not use plastic folders for submitting your project.

* Make a cover page with your NAME, CLASS, SECTION, ROLL NO. and SUBJECT.

* Submit it in the first week of July.

MATHS HOLIDAY HOMEWORK GRADE VI (2025-26)

1. Learn and write tables from 2 to 20 in Maths activity notebook.
2. Make a colourful rangoli using geometrical shapes.

MATERIAL REQUIRED:

- A4 Size sheet
- Pencil, Colours, Scale, Eraser.

PROJECT BASED ASSESSMENT

Identify five (5) geometrical shapes from daily life and find their perimeter and area.

[For example: Notebook, Pencil Box, Book, Mobile, Television, Study Table, Square Tile, etc.]

ART INTEGRATED LEARNING

MATCH-STICKS PATTERNS: Make different patterns by using sticks to make different shapes and also write down the total number of matchsticks used in each and every shape.

(NOTE: Example given below)



ग्रीष्मकालीन गृहकार्य

कक्षा - छठी

विषय -हिन्दी

लेखन कार्य:-

- 1.पंद्रह(15) पृष्ठ(पेज)सुलेख करें। (यह कार्य अलग से कार्य पुस्तिका में करें)
2. आपकी व्याकरण की पाठ्यपुस्तक अनुपम के माध्यम से (आर्थिक सहायता के लिए विद्यालय के प्रधानाचार्य को प्रार्थना पत्र लिखिए)। (यह कार्य अपनी हिंदी की कार्य पुस्तिका में ही करें)
3. आपकी व्याकरण की पाठ्यपुस्तक अनुपम के माध्यम से (अपने पुराने सहपाठी को नए विद्यालय के बारे में बताते हुए पत्र लिखिए)। (यह कार्य अपनी हिंदी की कार्य पुस्तिका में ही करें)

परियोजना कार्य:-

- 1.आपने ग्रीष्मकालीन अवकाश को कैसे बिताया यह बताते हुए एक परियोजना तैयार कीजिए। (यह परियोजना A4 साइज के पृष्ठ में ही करें)

पठन कार्य:-

- 1.प्रतिदिन किसी दैनिक समाचार पत्र को पढ़िए।
2. पीरियोडिक-1(PT-1) के लिए पढ़ाए गए सभी पाठों को पढ़िए और याद कीजिए। (परीक्षा की तैयारी हेतु)